

# Perimeter of Common shapes 16-2

Learning Goal: I can find the perimeter of polygons with common shapes.

## Let's Review:

**Perimeter** = the distance AROUND the OUTSIDE of a shape or object

Hint: think the fence around your backyard

**Square** = all four sides have the SAME length



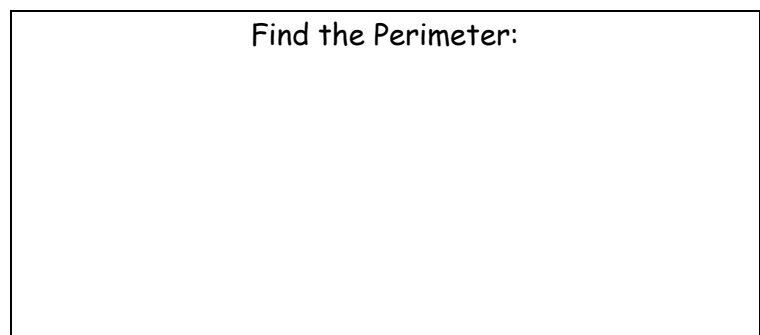
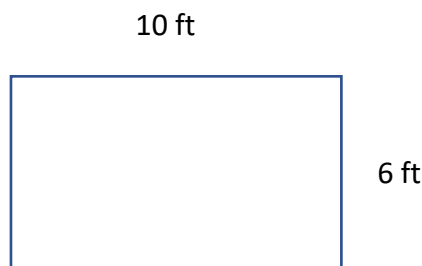
**Rectangle** = Two pairs of opposite sides have the SAME length

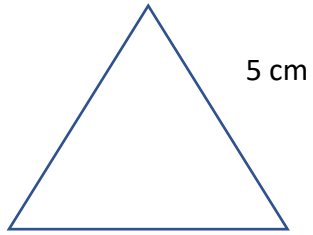


**Equilateral Triangle** = all three sides have the SAME length




## Let's Try!





Find the Perimeter:



Find the Perimeter: